



LIMPOPO

PROVINCIAL GOVERNMENT
REPUBLIC OF SOUTH AFRICA

TERM 4 TEST

GRADE 09

MATHEMATICS
17 NOV 2021

MARKS: 100

TIME: 2 HOUR

16 NOV 2021

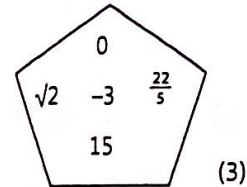
INSTRUCTIONS TO THE CANDIDATES

1. This question paper consists of 8 questions
2. Answer ALL questions.
3. Clearly show all the calculations
4. Write neatly and legibly.
5. The use of scientific calculator is allowed
6. This question paper consist of 4 pages

Question 1

a. From the set of numbers given, identify the following:

- i. natural numbers
- ii. integers
- iii. irrational numbers



(3)

b. Convert these decimals to fractions.

i. 0,25

ii. 0,3

iii. 1,65

(3)

c. Evaluate the following:

i. $\sqrt{64} - \sqrt{81}$

ii. $60 \div \frac{1}{3}$

iii. $\sqrt{6,25} + 7\frac{1}{2}$

(3)

d. Round off 245 837,218 to the nearest

i. Hundred

ii. Hundredth (2 decimal places)

(2)

e. Solve the following word problems

i. A woman travels 740 km in 6 hours 24 min. What was her average speed for the journey? (3)

ii. A man saves R3 200 in the bank for 5 years. If the bank offers him 5,5% interest per year, how much will he have altogether after 5 years. Calculate the interest using the compound interest formula $A = P(1 + i)^n$. (3)

iii. If the current exchange rate is \$1 = R9,45, convert \$28 to Rand. (2)

iv. If the manager of a shop offers a 20% discount to staff, how much would a staff member have to pay for an item marked R685,95? (3) [22]

Question 2

Simplify the following:

a. $\frac{16x^3y^2}{24x^5y^{-3}}$

(2)

b. $3x(2x^2 - 4x + 2)$

(2)

c. $(2x + 3)(2x - 3)$

(2)

d. $(5x - 1)^2$

(3)

e. $\frac{4x}{3} - \frac{2x}{5}$

(3)

[12]

Question 3

Factorise the following if possible:

a. $2xy^2 - 12y$ (2)

b. $3x(a - 2b) + 4y(2b - a)$ (3)

c. $4a^2 - 25b^2$ (2)

d. $x^8 - 16$ (4)

[11]**Question 4**

Solve the following equations:

a. $2 - 5x = 3x - 14$ (2)

b. $5(x + 3) + 9 = 3(x - 2) + 6$ (2)

c. $\frac{x+1}{2} - 4 = \frac{x-1}{4}$ (3)

d. $(x - 4)(x + 7) = 0$ (2)

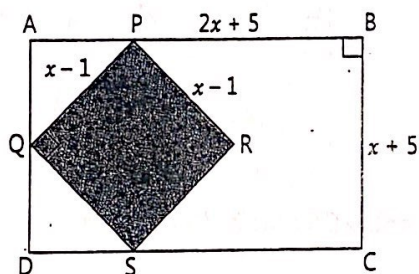
e. $4x^2 - 8x = 0$ (2)

f. $x^3 = -\frac{1}{27}$ (2)

g. $2^{2x+1} = 8$ (3)

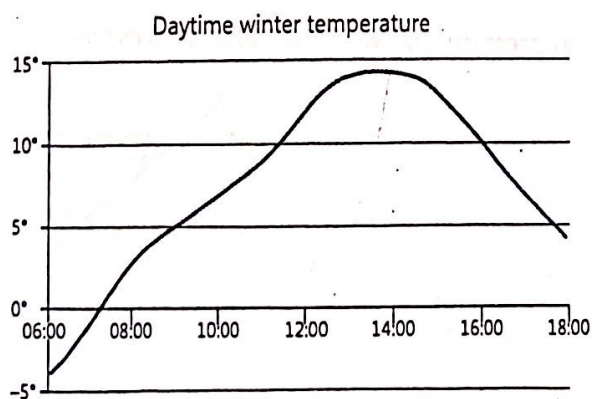
[16]**Question 5**

1. Consider the diagram below when answering the questions that follow:



- Find the area of rectangle ABCD. (2)
- Find the area of square PQRS. (2)
- Find the area of the unshaded region. (3)

2. Look at this graph and answer the questions.



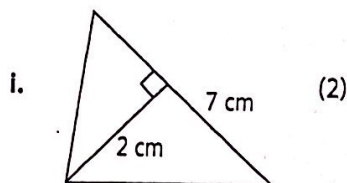
- Describe the type of day that this temperature graph shows us. (1)
- What is the maximum temperature for the day? (1)
- What is the minimum temperature as indicated on the graph? (1)
- When is the temperature 10°C? (Careful there are two answers) (2)

3. Consider the equations $y = 3x - 1$

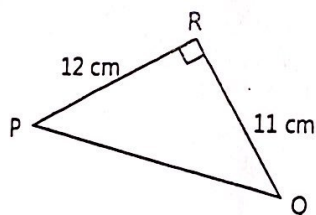
- Write down the y -intercept. (1)
 - Write down the x -intercept. (2)
 - Sketch the graph. (3)
 - On the same set of axes sketch the graph of $y = 2$. (2)
 - Write down the co-ordinates of the point of intersection of the graphs. (1)
4. Write the equation for a straight line with gradient $= -3$ and y -intercept $(0;2)$ (1)

Question 6

- In the following number pattern 2; 5; 8; 11... write the next 3 terms and give the rule for the number pattern. (2)
- Given $p = 2q + 7$, find values for p if: i. $q = -3$ (2) ii. $q = \frac{7}{2}$ (2)
- Calculate the area of each of the following shapes.

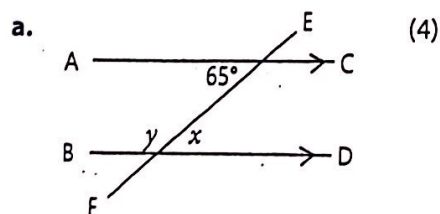


- Calculate the length of side PQ of the right angled triangle PQR. (3)



Question 7

Find the unknown in each of the following with reasons:



[4]

Question 8

Write down the co-ordinates for the image after the following translations:

- a. $P(-3; -6) \quad (x; y) \rightarrow (x; -y)$
- b. $Q(0; 5) \quad (x; y) \rightarrow (y; x)$
- c. $R(-4; 3) \quad (x; y) \rightarrow (-x; y)$
- d. $V(3; -5)$ if it is reflected about the x -axis

[4]

TOTAL [100]
